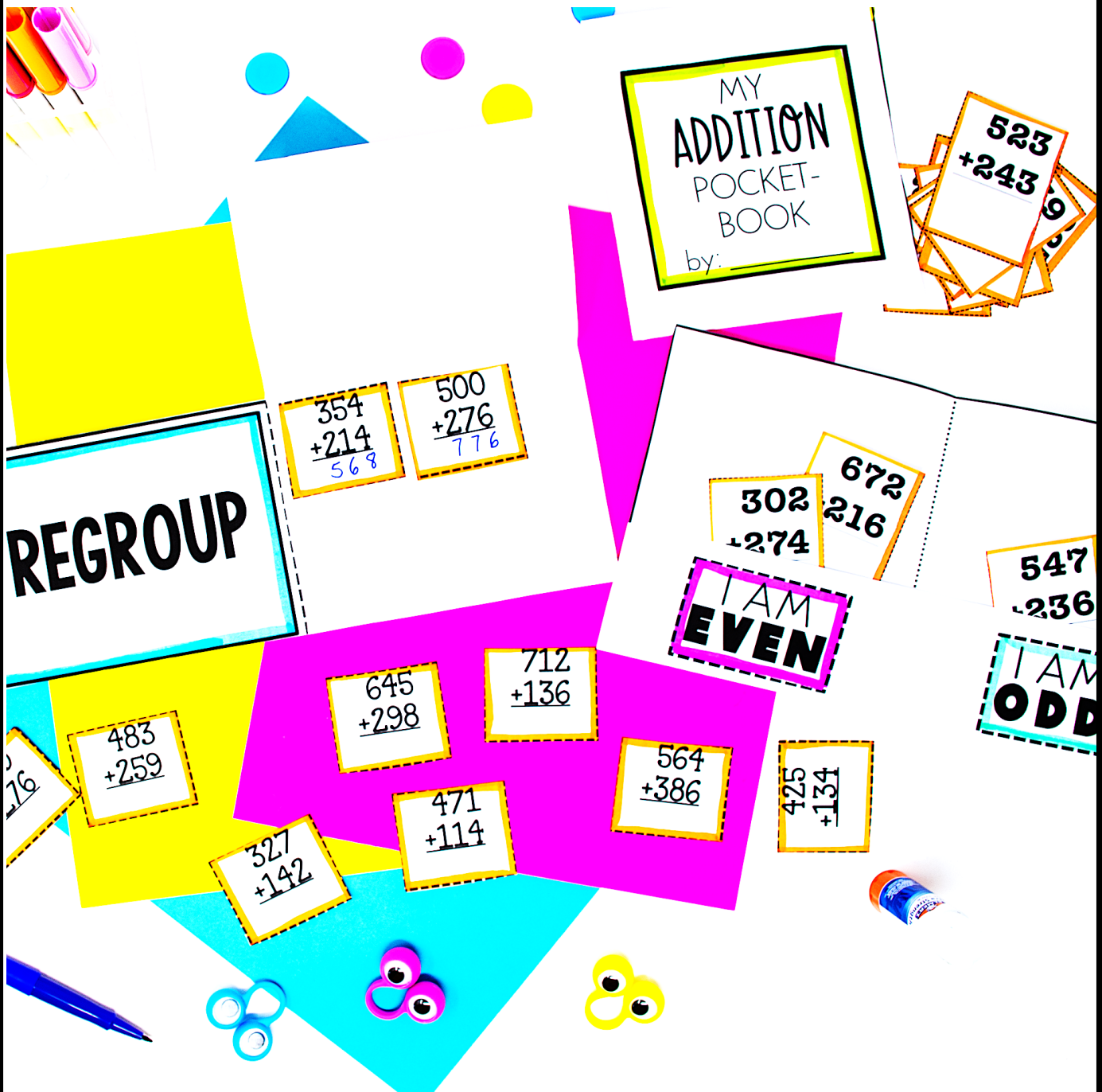


3 DIGIT

ADDITION WITH REGROUPING



BY AMY LEMONS

REGROUPING POSTERS

First, add the ones place. Do you need to regroup? Then, add the tens place. Do you need to regroup? Last, add the hundreds place.

$$\begin{array}{r} 1 \\ 519 \\ + 243 \\ \hline 762 \end{array}$$

First, add the ones place. Do you need to regroup? Then, add the tens place. Do you need to regroup? Last, add the hundreds place.

$$\begin{array}{r} 1 \quad 1 \\ 358 \\ + 195 \\ \hline 553 \end{array}$$



ADDITION POCKET BOOKS



"I SPY" TRIPLE DIGIT ADDITION PROBLEMS!

"I" SPY TRIPLE DIGIT ADDITION PROBLEMS!

A.		F.	
B.		G.	
C.		H.	
D.		I.	
E.			

Yellow cards with math problems and letters:

- Card 1: $567 + 228 =$ (Letter A)
- Card 2: $3 + 2 =$ (Letter B)
- Card 3: $4 +$ (Letter H)
- Card 4: $5 +$ (Letter G)
- Card 5: $6 +$ (Letter F)



FLAPBOOKS

REGROUP

$$\begin{array}{r} 354 \\ +214 \\ \hline 568 \end{array}$$

$$\begin{array}{r} 500 \\ +276 \\ \hline 776 \end{array}$$

$$\begin{array}{r} 849 \\ +276 \\ \hline \end{array}$$

$$\begin{array}{r} 483 \\ +259 \\ \hline \end{array}$$

$$\begin{array}{r} 327 \\ +142 \\ \hline \end{array}$$

$$\begin{array}{r} 645 \\ +298 \\ \hline \end{array}$$

$$\begin{array}{r} 712 \\ +136 \\ \hline \end{array}$$

$$\begin{array}{r} 471 \\ +114 \\ \hline \end{array}$$

Name: _____
Solve the problem underneath the flap.
Addition with Regrouping Flapbook

$$\begin{array}{r} 76 \\ +9 \\ \hline \end{array}$$

$$\begin{array}{r} 488 \\ +165 \\ \hline \end{array}$$

$$\begin{array}{r} 694 \\ +237 \\ \hline \end{array}$$

ODD

$$\begin{array}{r} 827 \\ +465 \\ \hline 1,292 \end{array}$$

$$\begin{array}{r} 473 \\ +277 \\ \hline 750 \end{array}$$

$$\begin{array}{r} 657 \\ +155 \\ \hline 812 \end{array}$$

$$\begin{array}{r} 539 \\ +455 \\ \hline 994 \end{array}$$

$$\begin{array}{r} 392 \\ +439 \\ \hline \end{array}$$

$$\begin{array}{r} 202 \\ +188 \\ \hline \end{array}$$

$$\begin{array}{r} 475 \\ +378 \\ \hline \end{array}$$

$$\begin{array}{r} 382 \\ +398 \\ \hline \end{array}$$

$$\begin{array}{r} 575 \\ +358 \\ \hline \end{array}$$

$$\begin{array}{r} 248 \\ +137 \\ \hline \end{array}$$

$$\begin{array}{r} 355 \\ +239 \\ \hline \end{array}$$

Name: _____
Solve the problem underneath the flap.
Addition with Regrouping Flapbook

$$\begin{array}{r} 248 \\ +137 \\ \hline \end{array}$$

$$\begin{array}{r} 355 \\ +239 \\ \hline \end{array}$$

WORD PROBLEM SCOOT

©2009 by Linda Ward Beech, Scholastic Teaching Resources

A

Jose went to the store to buy candy for his class party. He bought 13 suckers and 158 gumballs. How many candies did he buy in all?

B

There were 122 students in Kindergarten, 85 students in 1st Grade, and 137 students in 2nd Grade. How many students were in Kindergarten and 2nd Grade?

C

A group of ants were walking by the playground. We counted 219 ants carrying leaves. We also counted 156 ants carrying twigs.

D

There were 368 fewer ants carrying twigs than ants carrying leaves.

Name: _____

triple digit addition
WORD PROBLEM

A

C

E

G

E

We counted the books in our house. We had 186 books in my brother's room, 273 books in the family room, and 35 books in my baby sister's room. How many books did we count in our house?

F

There are 349 girls in our school. There are 358 boys in our school. We also have 30 teachers. How many boys and girls are in our school?

G

I read my entire chapter book over a three day period. If I read 124 pages on Monday, 69 pages on Tuesday, and 238 pages on Wednesday, how many pages did my chapter book have in all?

H

My family collected seashells at the beach last summer. I gathered 87 seashells. My sister gathered 194 seashells. How many seashells did we gather last summer?

B

D

F

PRINTABLES

Name _____

ROLL AND ADD


Roll the dice to make two 3-digit numbers. Then, add to find the sum.

3	6	1
+	3	1
6 7 2		

1	4	3
+		

+		

+		

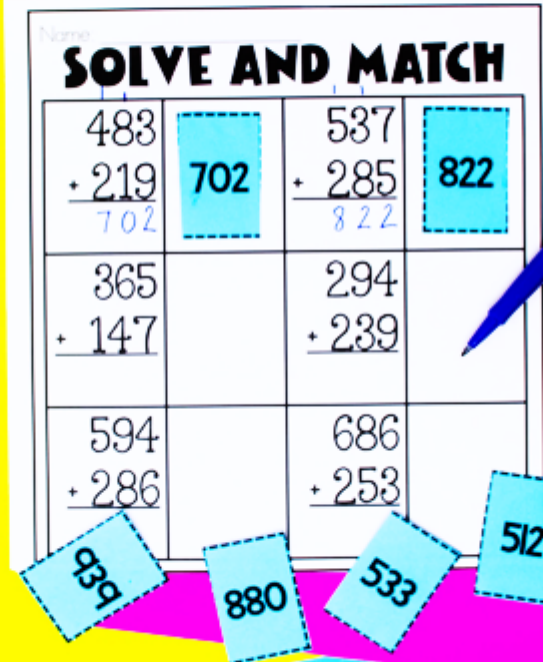


Name _____

SOLVE AND MATCH

$\begin{array}{r} 488 \\ + 219 \\ \hline 702 \end{array}$	702	$\begin{array}{r} 537 \\ + 285 \\ \hline 822 \end{array}$	822
$\begin{array}{r} 365 \\ + 147 \\ \hline \end{array}$		$\begin{array}{r} 294 \\ + 239 \\ \hline \end{array}$	
$\begin{array}{r} 594 \\ + 286 \\ \hline \end{array}$		$\begin{array}{r} 686 \\ + 253 \\ \hline \end{array}$	

939 880 533 512



PRINTABLES

Name: _____

Roll and Add

Roll the dice to make two 3-dgt numbers. Then add to find the sum.

4	1	9
+ 2	5	3
1,72		

4	3	1
+ 9	8	6
1,417		

8	5	7



Spin and Add

Spin from Spinner A. Write your number. Spin from Spinner B. Write your number. Add to find your sum.

2	8	9
+ 6	9	4
983		

3	0	7
+ 9	4	6
1,253		

6	7	9
+ 5	5	2
1,231		

