


MAY MATH TASKS

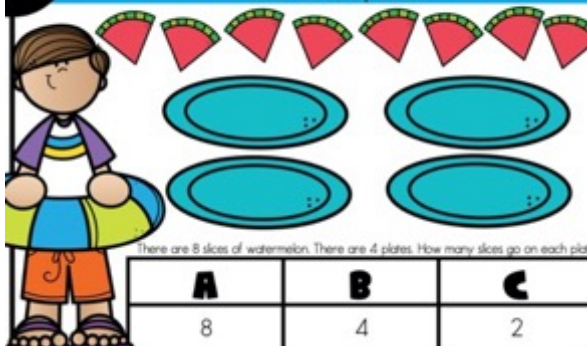
1 HOW MANY IN ALL?
Look at the picture. Find the equation that matches the picture.



Find the equation that shows how many flip flops there are in all.

A	B	C
$3 \times 2 = 6$	$3 \times 3 = 9$	$3 \times 2 = 5$


2 DISHING OUT DIVISION
We've got to divide the items out equally. Look at the picture. Solve the word problem.



There are 8 slices of watermelon. There are 4 plates. How many slices go on each plate?

A	B	C
8	4	2

3 TIME FOR SOME SUN!
The sun isn't sure what to do! Look at the clock and find the time shown. Then, tell what time it will be in one hour.




A	6:25
B	5:30
C	6:05

What time will it be in one hour?

:


4 SERVING UP STORIES
Read the word problem. Solve. Find the answer.



Rocio was selling lemonade. She charged 25 cents for each cup. Marco bought 3 cups. How much money did Marco owe Rocio?

A	B	C
28 cents	70 cents	75 cents

5 COMPARING BUBBLES
First, find the total of each set of coins. Then, compare the sets of coins.



A	B	C
<	>	=
is less than	is greater than	is equal to

- 5 activities
- 12 problems each
- answer keys
- recording sheets

BY AMY LEMONS

HOW MANY IN ALL?

1

HOW MANY IN ALL?

Look at the picture. Find the equation that matches the picture.



Find the equation that shows how many flip flops there are in all.

A $3 \times 2 = 6$	B $3 \times 3 = 9$	C $3 \times 2 = 5$
------------------------------	------------------------------	------------------------------

Name: _____

HOW MANY IN ALL?

Draw a picture that matches the multiplication situation. Write the multiplication equation and answer.

PICTURE:



ANSWER:

$$3 \times 2 = 6$$

PICTURE:

ANSWER:

2


3

5

6

HOW MANY IN ALL?

1 **HOW MANY IN ALL?**
 Look at the picture. Find the equation that matches the picture.




Find the equation that shows how many flip flops there are in all.

A	B	C
$3 \times 2 = 6$	$3 \times 3 = 9$	$3 \times _ = 5$

- 12 Task Cards to practice 2 digit numbers
- Answer Key
- 2 Recording Sheet options to choose from

A **HOW MANY IN ALL?**
 Check your answers!



1	A	2	B	3	A	4	C
5	C	6	B	7	C	8	B
9	A	10	C	11	B	12	C

Name: _____

HOW MANY IN ALL?
 Write the answer in each box.

1	2	3	4
5	6	7	8
9	10	11	12

Name: _____

HOW MANY IN ALL?
 Picture that matches the multiplication situation. Write the multiplication equation and answer.

PICTURE:	ANSWER:	PICTURE:	ANSWER:
		4	
		5	
		6	

DISHING OUT DIVISION

1 COMPARING BUBBLES

First, find the total of each set of coins. Then, compare the sets of coins.



A	B	C
<	>	=
is less than	is greater than	is equal to

Name: _____

COMPARING BUBBLES


BY AMY LEMONS

Write the amounts from each bubble. Compare the amounts.

BUBBLE 1:	COMPARE:	BUBBLE 2:		COMPARE:	BUBBLE 2:
46 cents	<	60 cents	5		
			6		

DISHING OUT DIVISION

1 DISHING OUT DIVISION
 We've got to divide the items out equally. Look at the picture.
 Solve the word problem.




There are 6 shells. There are 2 buckets. How many seashells go in each bucket?

A	B	C
3	2	6

- 12 Task Cards to practice 2 digit numbers
- Answer Key
- 2 Recording Sheet options to choose from

A DISHING OUT DIVISION
 Check your answers!



1 A	2 C	3 B	4 A
5 C	6 B	7 A	8 C
9 B	10 A	11 B	12 C


Name: _____

DISHING OUT DIVISION
 Write the answer in each box.

1	2	3	4
5	6	7	8
9	10	11	12


Name: _____

DISHING OUT DIVISION
 Draw a picture to math the division problem. Write the answer.

DIVISION PICTURE	ANSWER	DIVISION PICTURE	ANSWER
	4		
	5		
	6		

TIME FOR SOME SUN!

1 **TIME FOR SOME SUN!**
The sun isn't sure what to do! Look at the clock and find the time shown. Then, tell what time it will be in one hour.



A	12:10
B	12:05
C	1:00

What time will it be in one hour? :

BY AMY LEMONS

Name: _____ BY AMY LEMONS


TIME FOR SOME SUN!

Write the answer. Write what the time will be in one hour.

ANSWER:	WHAT TIME WILL IT BE IN ONE HOUR?	ANSWER:	WHAT TIME WILL IT BE IN ONE HOUR?
12:05	1:05		
2		5	
3		6	

TIME FOR SOME SUN!

1 **TIME FOR SOME SUN!**
The sun isn't sure what to do! Look at the clock and find the time shown. Then, tell what time it will be in one hour.



A	12:10
B	12:05
C	1:00

What time will it be in one hour?

BY AMY LEMONS

- 12 Task Cards to practice 2 digit numbers
- Answer Key
- 2 Recording Sheet options to choose from

A **TIME FOR SOME SUN!**
Check your answers!



1	B	2	A	3	A	4	C
5	A	6	B	7	B	8	C
9	B	10	A	11	B	12	C

BY AMY LEMONS

Name: _____

TIME FOR SOME SUN!
Write the answer in each box.

1	2	3	4
5	6	7	8
9	10	11	12

Name: _____

TIME FOR SOME SUN!
Write the answer. Write what the time will be in one hour.

ANSWER	WHAT TIME WILL IT BE IN ONE HOUR?	ANSWER	WHAT TIME WILL IT BE IN ONE HOUR?
		4	
		5	
		6	

SERVING UP STORIES

1

SERVING UP STORIES

Read the word problem. Solve. Find the answer.



Julia made ice cream cones at work. She made 73 chocolate cones and 28 vanilla cones. How many more chocolate cones did she make than vanilla?

A	B	C
101	91	45

Name: _____

SERVING UP STORIES

BY AMY LEMONS


Show your work to solve. Write the answer.

SOLVE HERE:	ANSWER:	SOLVE HERE:	ANSWER:
$73 - 28$	45		
		5	
		6	



SERVING UP STORIES

1 SERVING UP STORIES
Read the word problem. Solve. Find the answer.



Julia made ice cream cones at work. She made 73 chocolate cones and 28 vanilla cones. How many more chocolate cones did she make than vanilla?

A	B	C
101	91	45

BY AMY LEMONS

- 12 Task Cards to practice 2 digit numbers
- Answer Key
- 2 Recording Sheet options to choose from

A SERVING UP STORIES
Check your answers!



1	C	2	A	3	B	4	C
5	A	6	B	7	A	8	A
9	C	10	B	11	A	12	B

BY AMY LEMONS

Name: _____

SERVING UP STORIES
Write the answer in each box.

1	2	3	4
5	6	7	8
9	10	11	12

Name: _____

SERVING UP STORIES
Show your work to solve. Write the answer.

SOLVE HERE:	ANSWER:	SOLVE HERE:	ANSWER:
		4	
		5	
		6	

COMPARING BUBBLES

1 COMPARING BUBBLES

First, find the total of each set of coins. Then, compare the sets of coins.



A	B	C
< is less than	> is greater than	= is equal to

Name: _____

COMPARING BUBBLES

BY AMY LEMONS

Write the amounts from each bubble. Compare the amounts.

BUBBLE 1:	COMPARE:	BUBBLE 2:	BUBBLE 1:	COMPARE:	BUBBLE 2:
46 cents	<	60 cents	5		
			6		



COMPARING BUBBLES

1 COMPARING BUBBLES
 First, find the total of each set of coins. Then, compare the sets of coins.

A	B	C
<	>	=
is less than	is greater than	is equal to

BY AMY LEMONS

- 12 Task Cards to practice 2 digit numbers
- Answer Key
- 2 Recording Sheet options to choose from

A COMPARING BUBBLES
 Check your answers!

1 A	2 C	3 A	4 A
5 B	6 B	7 C	8 C
9 A	10 B	11 A	12 C

BY AMY LEMONS

Name: _____

COMPARING BUBBLES
 Write the answer in each box.

1	2	3	4
5	6	7	8
9	10	11	12

Name: _____

COMPARING BUBBLES
 Write the amounts from each bubble. Compare the amounts.

BUBBLE 1	COPY/PASTE	BUBBLE 2	BUBBLE 1	COPY/PASTE	BUBBLE 2
			4		
			5		
			6		